

Specification Grid-2081

Class:-1

Sub:- Science

1st Term

Total Working Days:- 57

Science - 1, 2, 3, 4, 5

Health - 20, 21

Physical Education - 26, 27

Lesson should be finished for first term exam.

2nd Term

Total Working Days:- 44

Science - 6, 7, 8, 9, 10

Health - 22, 23

Physical Education - 28, 29, 30

Lesson should be finished for second term exam.

3rd Term

Total Working Days:- 55

Science - 11, 12, 13, 14, 15

Health - 24, 25

Physical Education - 31, 32, 33

Lesson should be finished for third term exam.

Final Term

Total Working Days:- 42

Science - 16, 17, 18, 19

Physical Education - 34, 35

Lesson should be finished for final term exam.

First Terminal Examination Grid :-2081

Class:-1

F.M=50

Sub:- Science

P.M= 20

S.N.	Types of questions	No of Q.N	Opt	Q.N to be done	Weight	Total
1.	Fill in the blanks.	4		4	1	4
2.	True or False.	4		4	1	4
3.	Match the following.	4		4	1	4
4.	Choose the correct answer.	4		4	1	4
5.	Circle the odd one.	4		4	1	4
6.	Fill in the missing letters.	4		4	1	4
7.	Re-arrange the letter.	4		4	1	4
8.	Write the name of the following.	4		4	1	4
9	Answer the following question.	7	1	4	1	12
10	Give the definition.	2		2	1.5	3
11	Draw the picture.	1		1	3	3

2nd , 3rd , 4th Terminal Examination Grid :-2081

Class:-1

F.M=50

Sub:- Science

P.M= 20

S.N.	Types of questions	No of Q.N	Opt	Q.N to be done	Weight	Total
1.	Fill in the blanks.	4		4	1	4
2.	True or False.	4		4	1	4
3.	Match the following.	4		4	1	4
4.	Choose the correct answer.	4		4	1	4
5.	Circle the odd one.	4		4	1	4
6.	Fill in the missing letters.	4		4	1	4
7.	Identify the following.	4		4	1	4
8.	Write the name of the following.	4		4	1	4
9	Answer the following question.	7	1	4	1	12
10	Give the definition.	2		2	1.5	3
11	Draw the picture.	1		1	3	3

First Terminal Examination

Model Questions - 2081

Class:-1

Time:- 2:00 Hrs

F.M=50

Sub:- Science

P.M= 20

Q.1) Fill in the blanks.

4x1=4

(living things, towel, two, grow)

- a) Cow is a
- b) We should wipe our face with a clean
- c) I have a eyes.
- d) Non- living do not

Q.2) True or False.

4x1=4

- a) Living things do not move. ☐
- b) Tiger and cat do not eat food. ☐
- c) Non-living grow. ☐
- d) Tiger and lion are herbivores animals. ☐

Q.3) Match the following.

4x1=4

- | | |
|------------|-------------------|
| a) Walking | Non-Living things |
| b) Book | Legs |
| c) Herbs | Flower |
| d) Rose | Very small plant |

Q.4) Choose the best answer.

4x1=4

- a) Tiger is a animals. (Omnivores/Carnivores)
- b) Apple is a plant. (Small/Big)
- c) Tree are things (living/Non-living)
- d) Most plants are in color. (green, red)

Q.5) Circle the odd one.

4x1=4

- a) Cow Goat Hen

- | | | |
|----------|-------|--------|
| b) Sheep | Bear | Fox |
| c) Rose | Lily | School |
| d) Stone | House | Tree |

Q.6) Fill in the blanks.

4x1=4

- a) S c _ o _ l b) T _ e e c) E _ r d) P _ n

Q.7) Re-arrange the letter to make word.

4x1=4

- a) Monkey _____
 b) Birds _____
 c) Apple _____
 d) Net _____

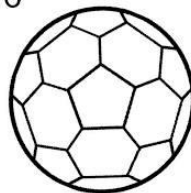
Q.8) Write the name of the followings.

4x1=4


a)




b)



c)



d)



Q.9) Answer the following Questions.

6x2=12

- a) Write any four living things.

Ans:-_____.

- b) Name any two body parts.

Ans:-_____.

- c) How many times do you brush your teeth in a day?

Ans:-_____.

d) What is herbivores animals?

Ans:-_____.

e) Write any four fruits name?

Ans:-_____.

f) What are running?

Ans:-_____.

g) How many ears do you have ?

Ans:-_____.

Q.10) Give the definitions of.

2x1.5=3

a) Cow

_____.

b) Flower

_____.



Q.11) Draw the pictures of

3x1=3

Bird

Flower

Umbrella



Second Terminal Examination

Model Questions - 2081

Class:-1

Time:- 2:00 Hrs

F.M=50

Sub:- Science

P.M= 20

Q.1) Fill in the blanks.

4x1=4

(Life, Move, two, piglet)

- a) Plants and animal have.....
- b) Animals from one place to another.
- c) I have eyes.
- d) The baby of pig is called.....

Q.2) True or False.

4x1=4

- a) Cow and buffalo eat only plants. ☐
- b) Man and Bear are omnivores. ☐
- c) Dog eat both plants and flesh. ☐
- d) Food gives us energy to do work. ☐

Q.3) Match the following.

4x1=4

- | | |
|------------|---------------|
| a) Dog | Vegetables |
| b) Apple | Puppy |
| c) Cabbage | Fruit |
| d) Tree | Living Things |

Q.4) Choose the best answer.

4x1=4

- a) A lays eggs. (goat/hen)
- b) I comb myregularly. (hair/teeth)
- c) Plants are..... things. (living/Non-living)
- d) Buffalo have both horn and (tail, sail)

Q.5) Circle the odd one.

4x1=4

- a) Sheep Cow Fox

- | | | |
|------------|--------|------|
| b) Cabbage | Tomato | Rice |
| c) Nose | Eye | Pen |
| d) Tree | Cow | Book |

Q.6) Fill in the missing letters.

4x1=4

- a) P _ P _ Y b) Z _ B _ A c) N _ S _ d) M _ _ TH

Q.7) Identify the following

4x1=4

- e) You use to me collect waste _____
- f) I live in a den _____
- g) I am a baby of cat _____
- h) We get honey from a _____


Q.8) Write the name of the followings.

4x1=4

a)



b)



c)



d)



Q.9) Answer the following Questions.

6x2=12

- a) Name any two body parts of fish .

Ans:-_____.

- b) What are living things?

Ans:-_____.

- c) What is the name of baby tiger ?

Ans:-_____.

d) Write any two flowers name.

Ans:-_____.

e) What are omnivores animals?

Ans:-_____.

f) Why should we take physical training daily?

Ans:-_____.

g) Name any two vegetables.

Ans:-_____.

Q.10) Give the definitions of.

2x1.5=3

a) Tree

b) Herbs



Q.11) Draw the pictures of

3x1=3

Apple

Fish

Flower



Third Terminal Examination

Model Questions - 2081

Class:-1

Time:- 2:00 Hrs

F.M=50

Sub:- Science

P.M= 20

Q.1) Fill in the blanks.

4x1=4

(Fly, domestic, wings, animals)

- a) We should take care of
- b) Wings are used to
- c) Cow is a
- d) Birds have feathers and

Q.2) True or False.

4x1=4

- a) Birds do not have wings. ☐
- b) We should not follow traffic rules. ☐
- c) We should take care of animals. ☐
- d) We get milk from cows and buffaloes. ☐

Q.3) Match the following.

4x1=4

- | | |
|-------------|---------------|
| a) Birds | Water sources |
| b) Lake | Fresh |
| c) Tree | wings |
| d) Football | Round shape |

Q.4) Choose the correct answer.

4x1=4

- a) Cow moves by (flying/walking)
- b) We need air to (walk /breath)
- c) We get milk from (dog/cow)
- d) We taste with our (nose/tongue)

Q.5) Circle the odd one.

4x1=4

- a) Parrot Vulture Crow Fox

b) Running	Drinking	Cooking	Washing
c) Tiger	Fox	Pencil	Elephant
d) Apple	Orange	Rice	Mango

Q.6) Fill in the missing letters.

4x1=4

a) B O _ K b) G R _ W c) H _ ND d) P l _ N T

Q.7) Identify the following.


4x1=4

- a) I have a wings _____
- b) I am a having a round shape _____
- c) We get honey from _____
- d) I live in a den _____

Q.8) Write the name of the followings.

4x1=4


a)



b)



c)



d)



Q.9) Answer the following Questions.

6x2=12

a) Name any two body parts of cow .

Ans:-_____.

b) Name any four animals having wings?

Ans:-_____.

c) Name any two animals that give us milk?

Ans:-_____.

d) Write any four uses of water.

Ans _____.

e) What are simple game?

Ans:- _____.

f) Name any 2 local games?

Ans:- _____.

g) What is environment ?

Ans:- _____.

Q.10) Give the definitions of.

2x1.5=3


a) Non- Living things

b) Flower

Q.11) Draw the pictures of

3x1=3

House



Model Questions - 2081

P.M= 20

4x1=4

d) A hen lives in a

4x1=4

d) We feel cold on a sunny day.

$$4 \times 1 = 4$$

d) Stem parts of plants

$$4 \times 1 = 4$$

d) Mango is a (flower/fruit)

$$4 \times 1 = 4$$

Rice

b) Root	Book	Leaf	Flower
c) Flood	Landslide	Sunny	Windy
d) Car	Bus	Van	Tree

Q.6) Fill in the missing letters.

4x1=4

a) C I _ U _ Y b) F _ S _ c) F _ _ D d) T _ E T _

Q.7) Identify the following.

4x1=4

- e) I a wild animal. I live in a _____
- f) I am a baby of elephant _____
- g) I am a mammal but I can fly _____
- h) I live in a nest _____

Q.8) Write the name of the followings.

4x1=4

a)



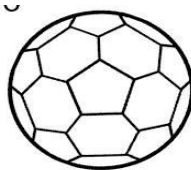
b)



c)



d)



Q.9) Answer the following Questions.

6x2=12

a) How many horns does a cow have?

Ans:-_____.

b) Write any two ways of caring for plants?

Ans:-_____.

c) What are living things? Any one examples.

Ans:-_____.

d) What is a cloudy day?

Ans _____.

e) What is the name of a baby tiger?

Ans:- _____.

f) Name any 4 animals having only tail?

Ans:- _____.

g) What is physical training ?

Ans:- _____.

Q.10) Give the definitions of.

2x1.5=3

a) Tree

b) Cow

Q.11) Draw the pictures of

3x1=3

Flower



Prepared by : Sheetal Dhakal

Shree Divya Jyoti Basic School

Devchuli-12, Gaindi

Best of Luck.....

